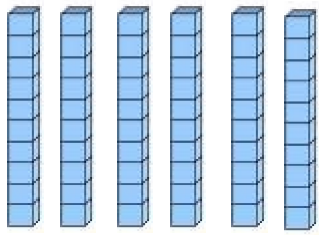


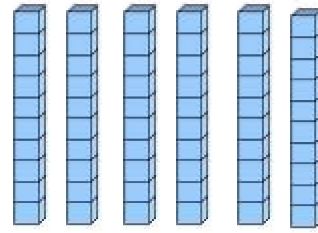
Prénom :

Date :

1 Complète.



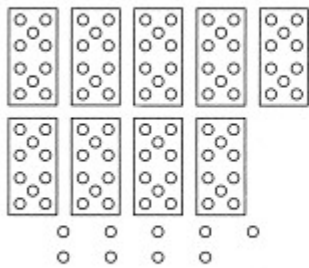
$$\square + \square = \square$$



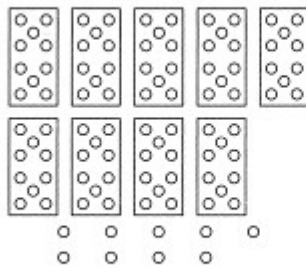
$$\square + \square = \square$$

2 Colorie et écris le nombre..

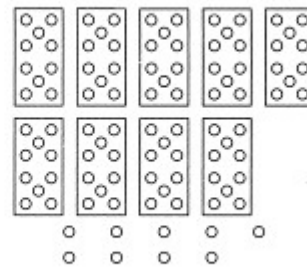
6 dizaines et 5 unités



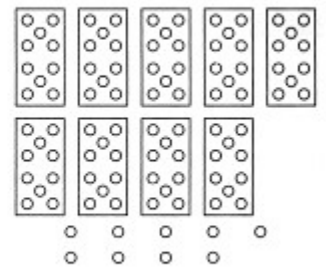
7 dizaines et 6 unités



7 dizaines et 3 unités



6 dizaines et 9 unités



3 Relie les étiquettes qui correspondent au même nombre.

Soixante-dix

67

$70 + 0$

Soixante-sept

75

$60 + 7$

Soixante-trois

63

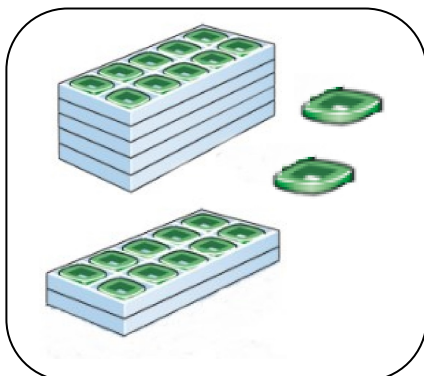
$70 + 5$

soixante-quinze

70

$60 + 3$

4 Relie



72

62

$60 + 12$

$60 + 2$

