

# Le nombre du jour

lundi mardi mercredi jeudi vendredi

109



cent-neuf



pair



impair

c

d

u



1

0

9

# Le nombre du jour

lundi mardi mercredi jeudi vendredi

---

---

---

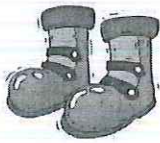
---

---

---

---

---



*pair*

c d u

--	--	--



*impair*

--	--	--

# Le nombre du jour

lundi mardi mercredi jeudi vendredi

---

---

---

---

---

---

---

---



*pair*

c d u

--	--	--



*impair*

--	--	--

# Le nombre du jour

lundi mardi mercredi jeudi vendredi

---

---

---

---

---

---

---

---



*pair*

c d u

--	--	--



*impair*

--	--	--

# Le nombre du jour

lundi mardi mercredi jeudi vendredi

---

---

---

---

---

---

---

---



*pair*

c d u

--	--	--



*impair*


--	--	--



# Séance 73 Les nombres de 20 à 40


1.  Observe l'exemple puis complète.

Exemple




22


vingt-deux




\_\_\_\_\_




\_\_\_\_\_



\_\_\_\_\_



\_\_\_\_\_

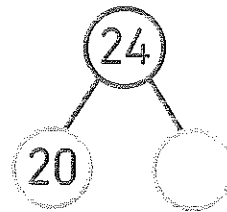
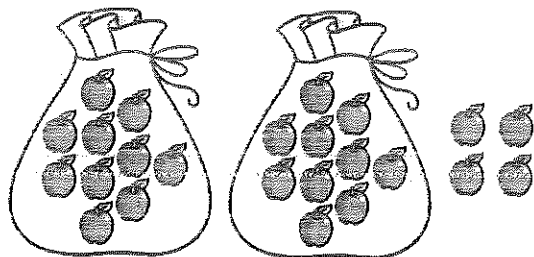


\_\_\_\_\_

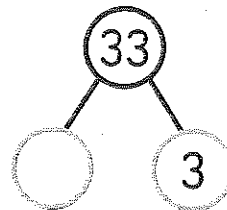
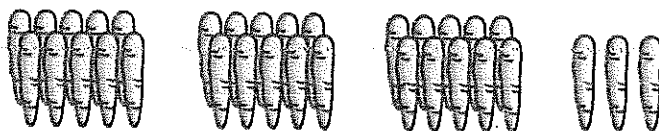
2.  Quel nombre vaut 1 de plus que 39 ?

3  Complète les familles de nombres.

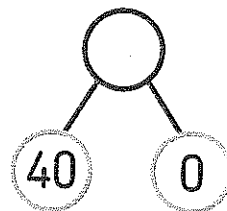
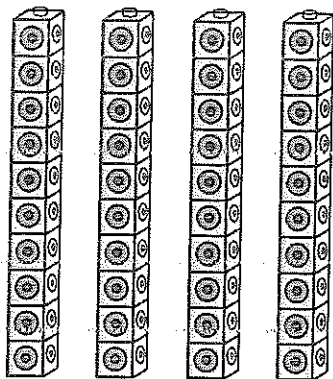
a)




b)



c)



4  Relie.



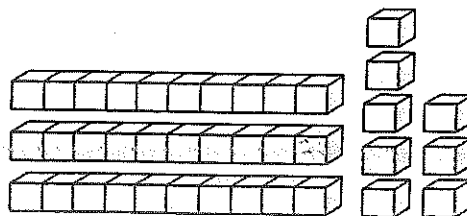
28

trente-sept

8 et 30

20 et 8

37




vingt-sept

Séance **74** Les nombres de 40 à 69


1  Observe l'exemple puis complète.

Exemple




*cinquante-quatre*

a)




\_\_\_\_\_

b)




\_\_\_\_\_

c)

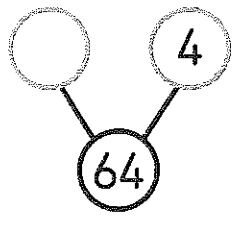

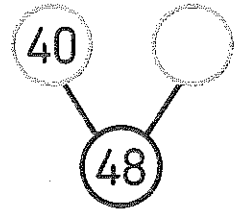
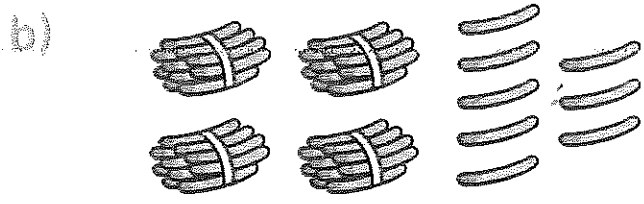

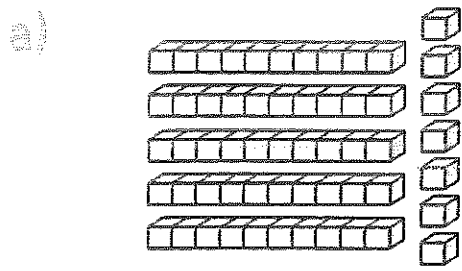


\_\_\_\_\_

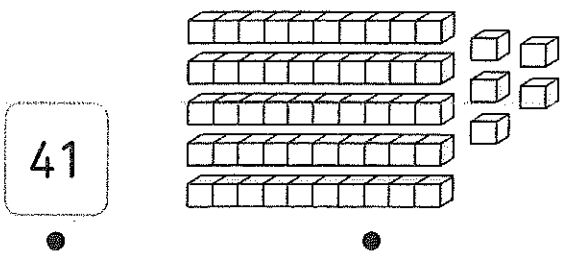
2 a)  Quel nombre vaut 1 de plus que 59 ?

b)  Quel nombre vaut 1 de moins que 50 ?

**3**  Complète les familles de nombres.



**4**  Relie.



41

7 et 40

1 de plus que 59

soixante






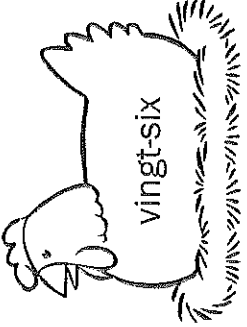




47

1 de plus que 40

55

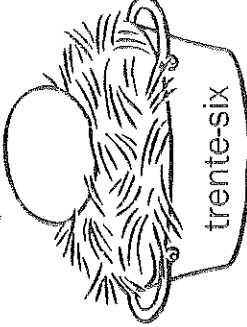
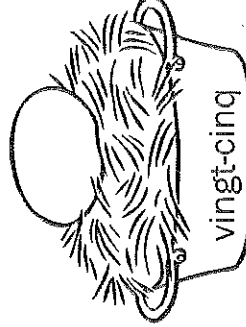


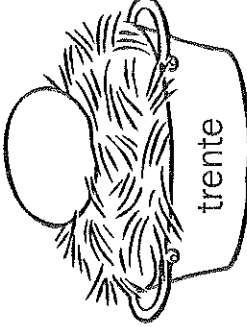


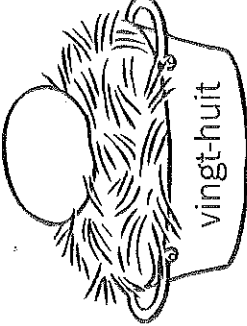




# Exercice 11

1 Reliez chaque poule à son œuf.

	31	
	22	
	23	
	34	
	35	

26      37      38      29      40

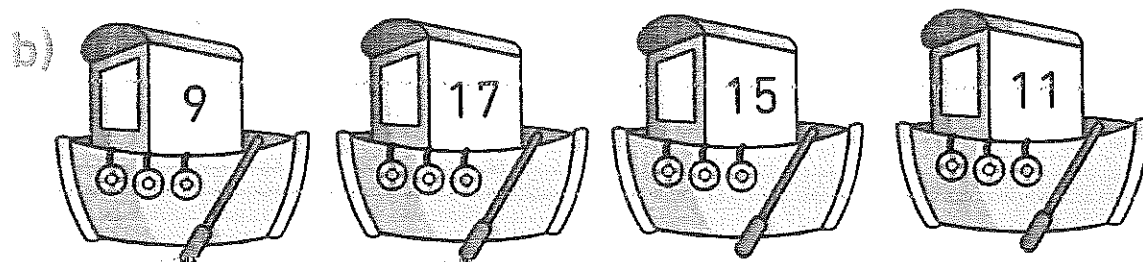
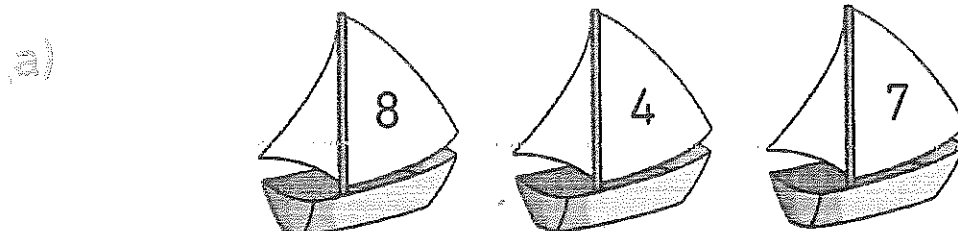
2 Écrivez le numéro du nid sur chaque œuf.

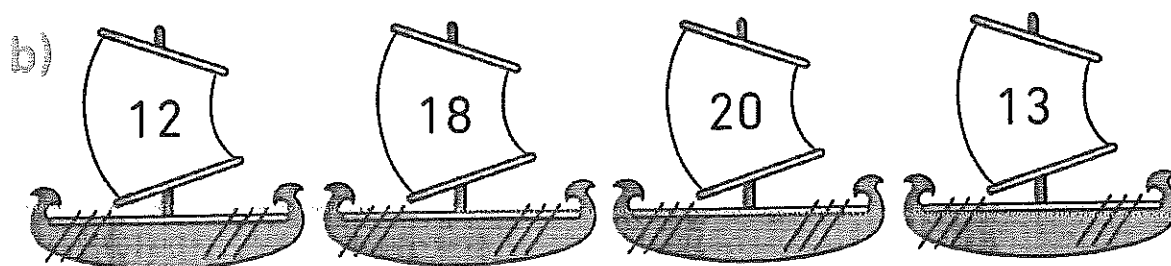




**Séance 50** Comparons et ordonnons trois nombres ou plus

1  Entoure le plus grand nombre.



2  Entoure le plus petit nombre.



**3**  Recopie les nombres dans les rectangles en les ordonnant du plus petit au plus grand.

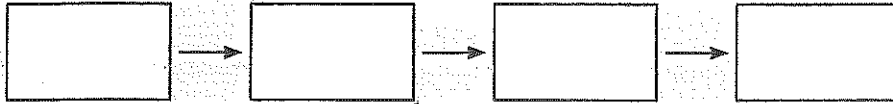
a)

9

12

5

17



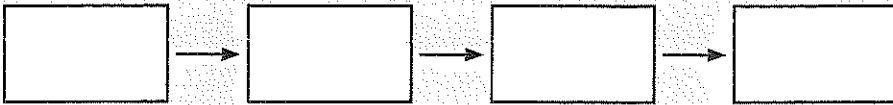
b)

8

19

13

6



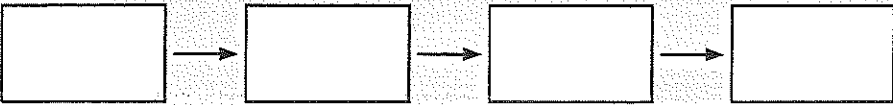
c)

11

15

20

8



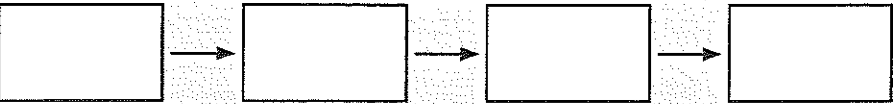
d)


14

7


18

10







5  
violet



7  
orange



6  
rouge



8  
bleu

3

$3+4$

$5+2$

$0+6$

$3+1$

$3+2$

$4+3$

$1+6$

$2+2$

$7+0$

$4+4$

$2+6$

$1+4$

$7+2$

$0+7$

$2+4$

$1+6$

$5+5$

$7+1$

$2+4$

$3+3$

$2+5$

$3+3$

$5+0$

$1+4$

$3+5$

$4+0$

$1+5$

$2+3$

$1+5$

$6+3$

$3+2$

$3+4$

$6+1$

$6+0$

$1+1$

$8+0$

$6+2$

$4+1$

$2+8$

$5+2$

$7+1$

$3+5$

$6+5$

$5+3$

$2+4$

$0+6$

$7+0$

$6+4$

$2+6$

$0+5$

$1+7$

$3+6$

$3+3$

$2+3$

$5+0$

$4+4$

$4+1$

$4+3$

$6+1$

$5+1$

$9+0$

$4+1$

$2+5$

# Repérage sur quadrillage (2)

Indique par une croix l'emplacement des points.

