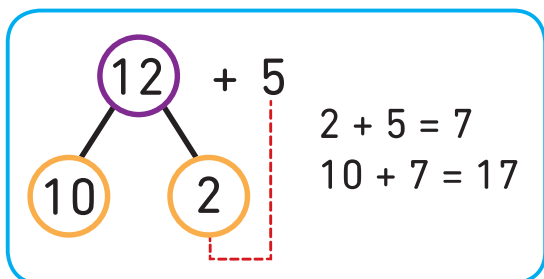
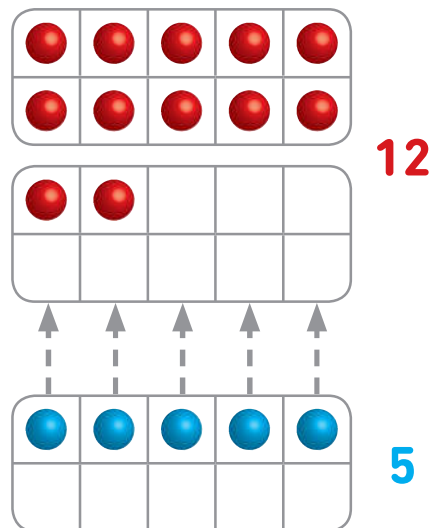


J'observe

Additionne 12 et 5.

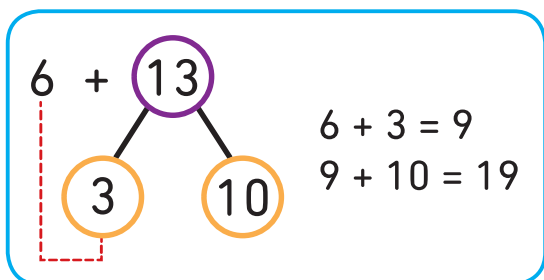
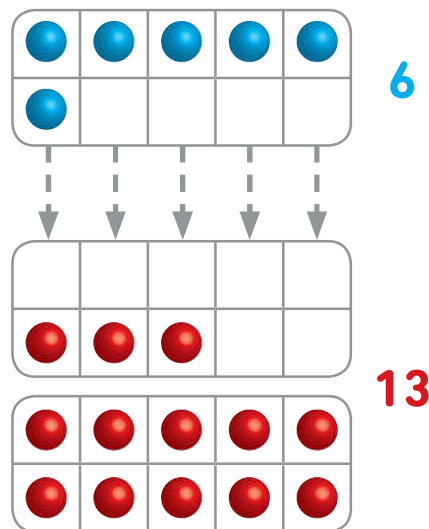
Décompose d'abord 12 en 10 et 2 puis additionne 2 et 5.



$12 + 5 = 17$

Additionne 6 et 13.

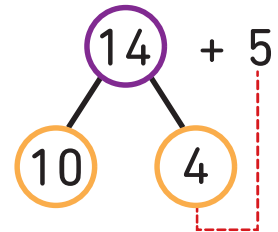
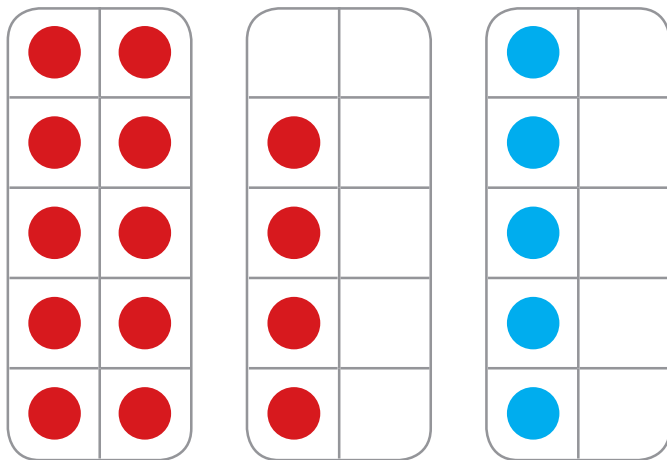
13, c'est 10 et 3.



$6 + 13 = 19$

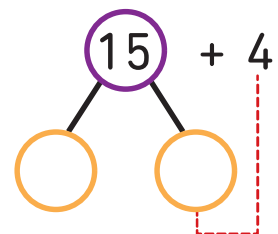
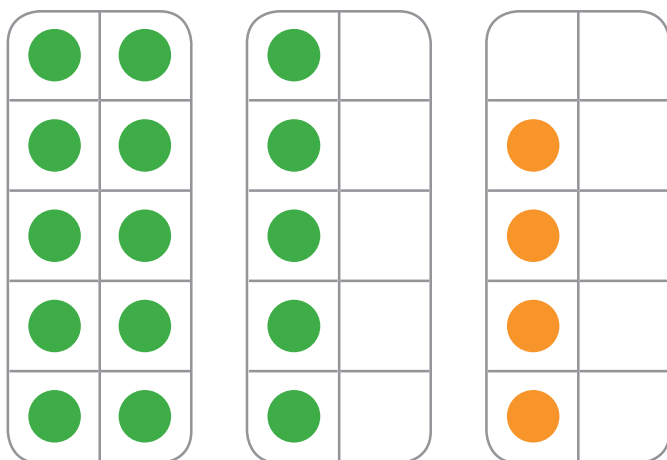
1 Additionne en décomposant le plus grand nombre.

$14 + 5 = \square$



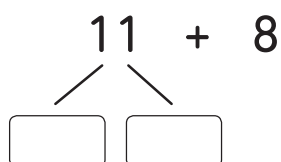
2 Complète.

$15 + 4 = \square$

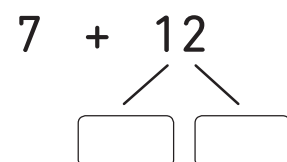


3 Additionne. Utilise des  pour t'aider.

a) $11 + 8 = \square$



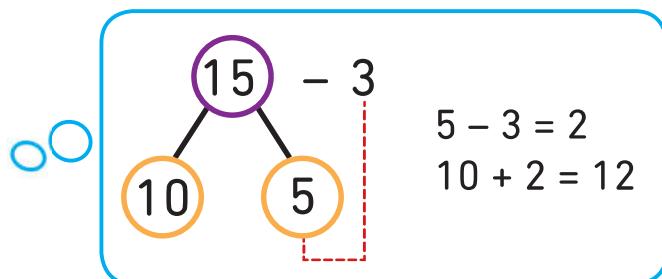
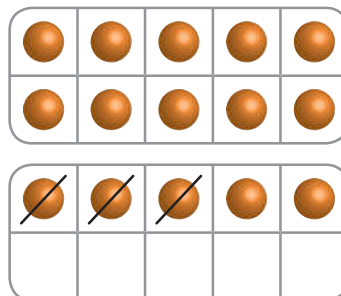
b) $7 + 12 = \square$



J'observe

Soustrais 3 de 15.

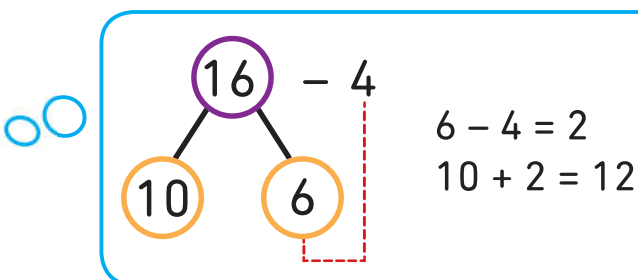
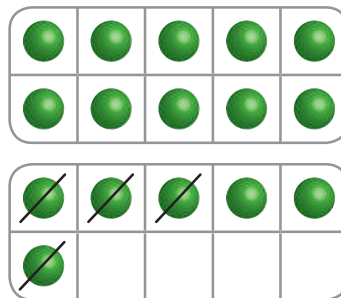
Décompose d'abord
15 en 10 et 5
puis soustrais 3 de 5.



$$15 - 3 = 12$$

Soustrais 4 de 16.

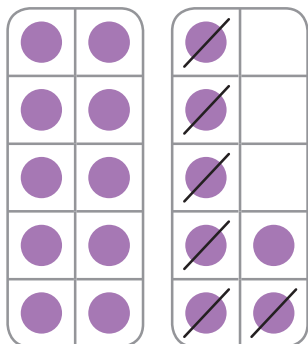
Soustrais 4 de 6.



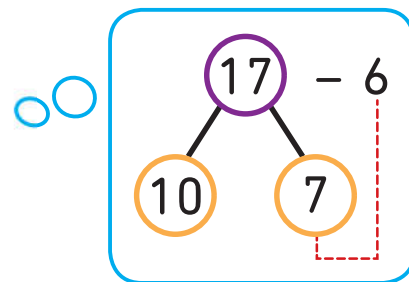
$$16 - 4 = 12$$

1 Soustrais en décomposant le plus grand nombre.

$17 - 6 = \square$

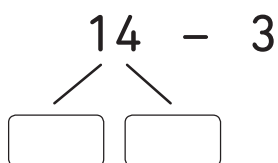
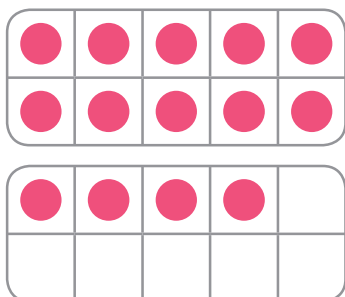


Soustrais
6 de 7.

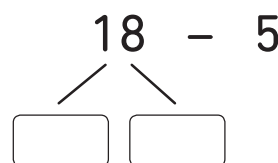
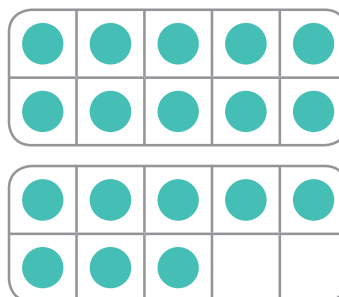


2 Soustrais.

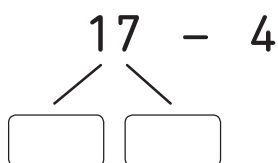
a) $14 - 3 = \square$



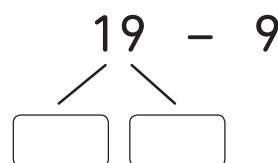
b) $18 - 5 = \square$



c) $17 - 4 = \square$



d) $19 - 9 = \square$



e) Peux-tu soustraire 8 de 14 de la même façon ?
Explique ta réponse.