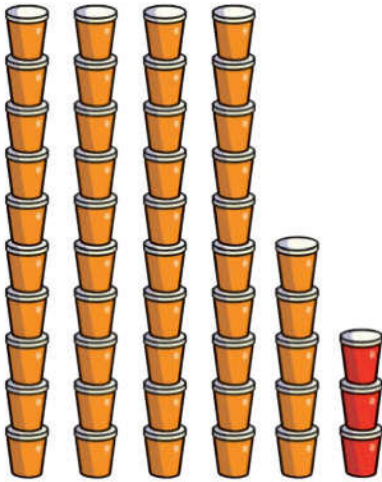


J'observe

Ajoute 3 à 45.

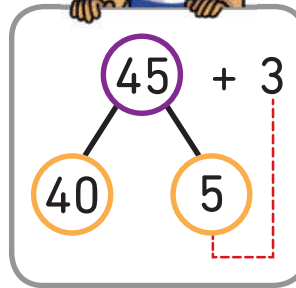


$$45 + 3 = 48$$

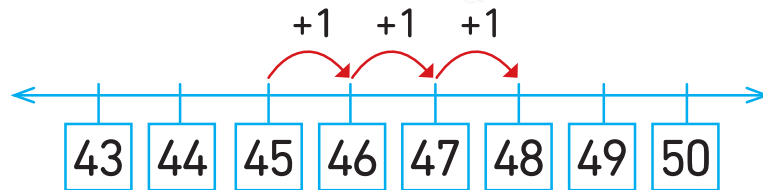


$$5 + 3 = 8$$

$$40 + 8 = 48$$




Dis « quarante-cinq » dans ta tête puis compte 3 unités à partir de 45 : 46, 47, 48.

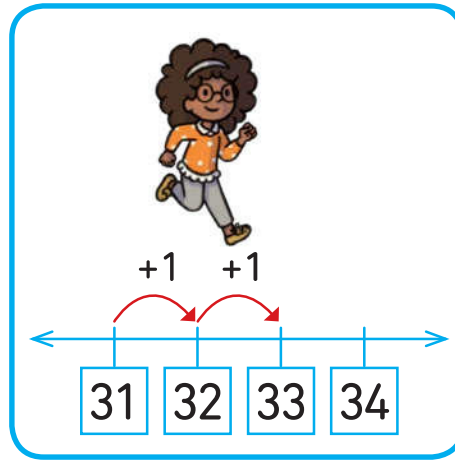
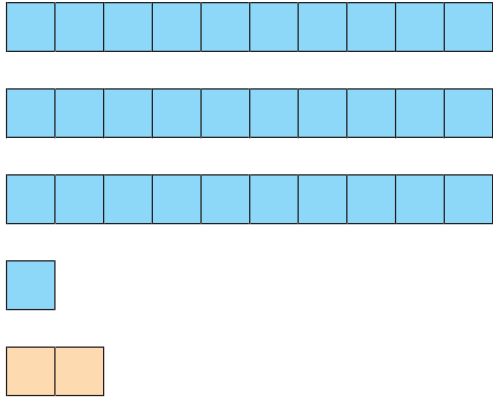


Peux-tu ajouter 2 à 47 ?

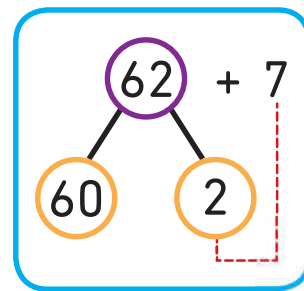
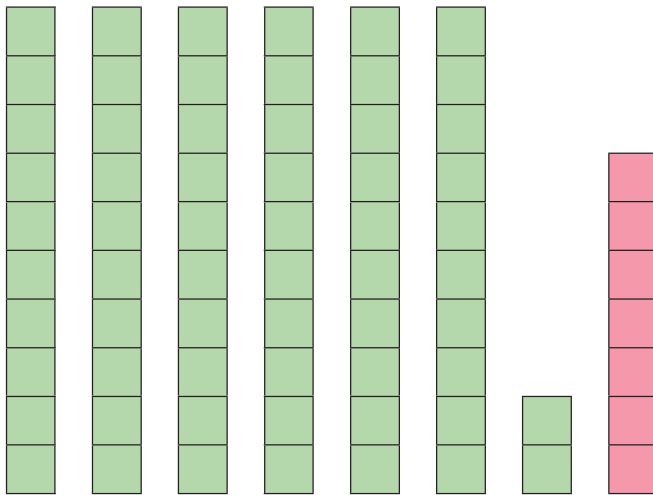
1 Additionne.

Utilise des  pour t'aider.

a) $31 + 2 = \square$



b) $62 + 7 = \square$



c) $53 + 5 = \square$

2 Mathis a 22 petites voitures.

Sa sœur lui en donne 6 de plus.

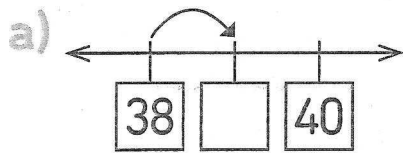
Combien de petites voitures a-t-il en tout ?

+ =

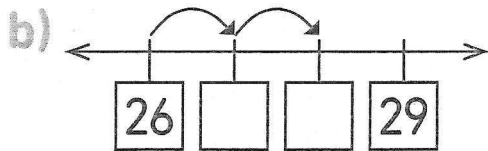
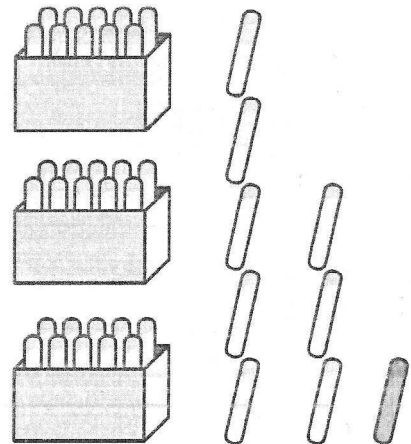
Mathis a voitures en tout.

Séance 86 Additionnons des unités

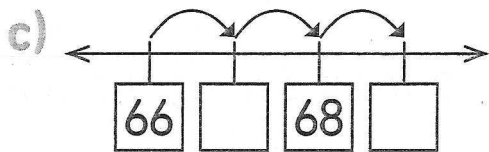
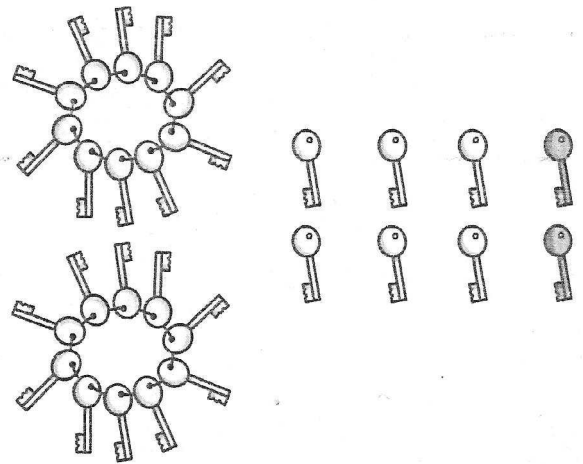
1  Complète puis additionne.



$38 + 1 = \square$



$26 + 2 = \square$

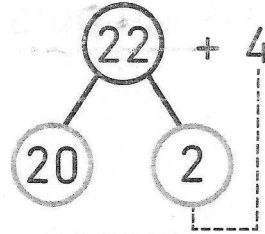
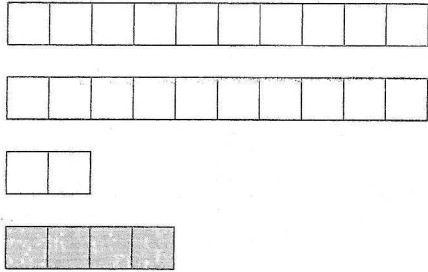


$66 + 3 = \square$

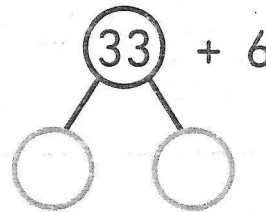
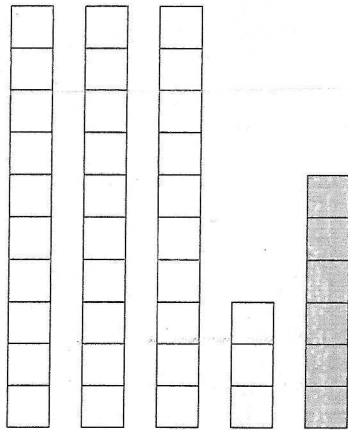
d) $58 + 2 = \square$

2 ✎ Additionne et complète.

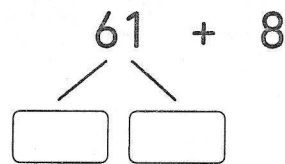
a) $22 + 4 = \square$



b) $33 + 6 = \square$



c) $61 + 8 = \square$



d) $54 + 4 = \square$

3 ✎ Soline a un petit train. Elle donne 3 wagons à Alex. Il lui reste 24 wagons. Combien en avait-elle au début ?

Soline avait wagons au début.