





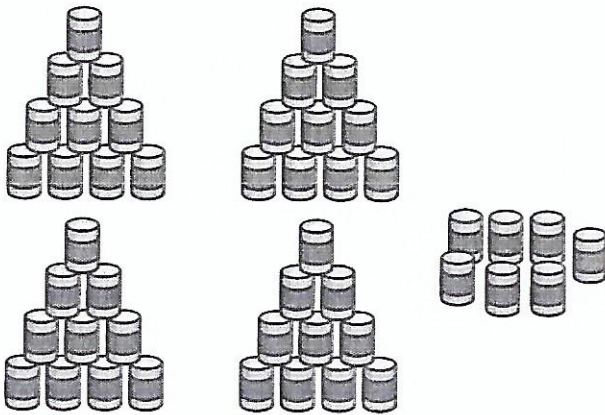
# Séance 76 Dizaines et unités

1 ✎ Complète.

a)	 <p>soixante et un</p>	61	
		dizaines	unités
		<input type="text"/>	<input type="text"/>
b)	 <p>cinquante-six</p>	<input type="text"/>	
		dizaines	unités
		<input type="text"/>	<input type="text"/>
c)	 <p>vingt-sept</p>	<input type="text"/>	
		dizaines	unités
		<input type="text"/>	<input type="text"/>
d)	 <p>quarante-six</p>	<input type="text"/>	
		dizaines	unités
		<input type="text"/>	<input type="text"/>

**2** ✎ Complète.

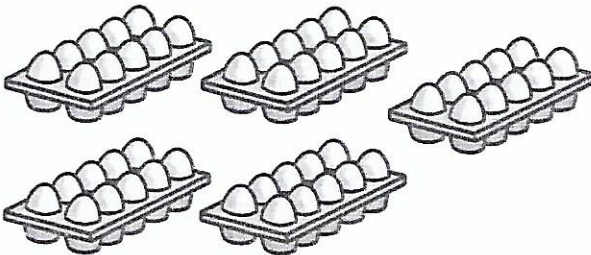
a)



Dizaines	Unités
<input type="text"/>	<input type="text"/>

Il y a  boîtes de conserve en tout.

b)




Dizaines	Unités
<input type="text"/>	<input type="text"/>

Il y a  œufs en tout.


**3** ✎ Colorie le nombre de carrés demandé.

a)



3 dizaines et 5 unités

b)



6 dizaines et 9 unités

Séance

77

Comptons de 1 en 1,  
comptons de 10 en 10

1 a) ✎ Écris les nombres manquants.

Boîtes aux lettres									
1	2	3	4	5	6	7	8	9	10
11	12	13	14		16	17	18	19	
21	22	23	24		26	27	28	29	
31	32	33	34		36	37	38	39	
41	42	43	44		46	47	48	49	
51									60
61	62	63	64		66	67	68	69	

b) ✎ Colorie les cases demandées.

5 dizaines et 5 unités

2 dizaines et 0 unité


6 dizaines et 3 unités


3 dizaines et 3 unités


4 dizaines et 7 unités

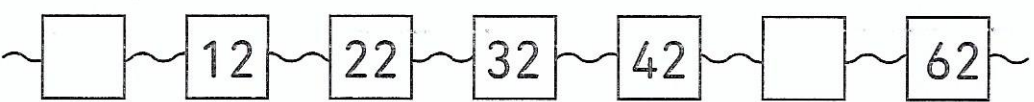
0 dizaine et 1 unité

**2**  Complète.


a) 
 A horizontal number line with boxes containing numbers. The sequence is: 59, an empty box, an empty box, 62, 63, 64, 65, 66, 67, an empty box, 69. Wavy lines extend from the ends of the line.

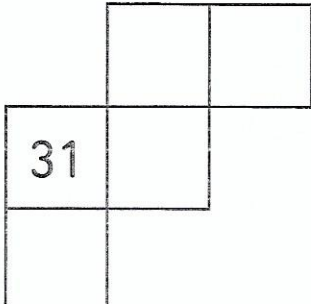
b) 
 A horizontal number line with circles containing numbers. The sequence is: 37, 36, 35, 34, an empty circle, 32, an empty circle, an empty circle, 29, 28, 27. Wavy lines extend from the ends of the line.

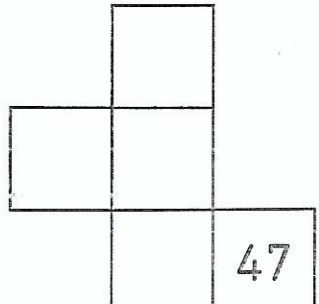
c) 
 A horizontal number line with triangles containing numbers. The sequence is: an empty triangle, 50, 40, 30, 20, an empty triangle, 0. Wavy lines extend from the ends of the line.

d) 
 A horizontal number line with boxes containing numbers. The sequence is: an empty box, 12, 22, 32, 42, an empty box, 62. Wavy lines extend from the ends of the line.

**3**  Complète ces morceaux de grille. (avec le tableau des nombres)

a) 
 A number grid with 2 columns and 5 rows. The numbers are: 9 (row 1, col 1), 10 (row 1, col 2), 20 (row 2, col 2), and empty boxes in (row 3, col 2), (row 4, col 2), and (row 5, col 2).

b) 
 A number grid with 3 columns and 3 rows. The numbers are: an empty box (row 1, col 2), an empty box (row 1, col 3), 31 (row 2, col 1), an empty box (row 2, col 2), and an empty box (row 3, col 1).

c) 
 A number grid with 3 columns and 4 rows. The numbers are: an empty box (row 1, col 2), an empty box (row 2, col 1), an empty box (row 2, col 2), an empty box (row 3, col 1), and 47 (row 3, col 3).