


Additionnons des unités

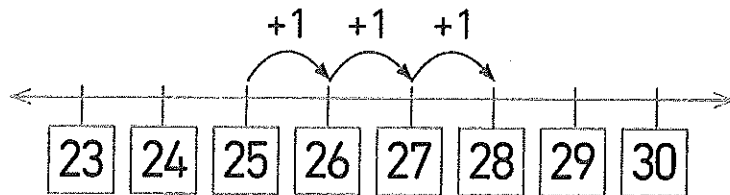
Observe

Ajoute 3 à 25.



$$25 + 3 = 28$$


Dis « vingt-cinq » dans ta tête puis compte 3 unités à partir de 25 : 26, 27, 28.




$25 + 3$	
20	5

- ① $5 + 3 = 8$
- ② $20 + 8 = 28$



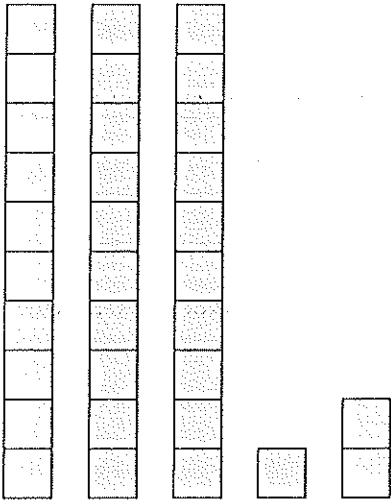
Peux-tu ajouter 2 à 27 ?




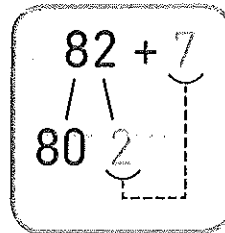

À toi ! Additionne.

Utilise des  pour trouver tes réponses.


a) $31 + 2 = \square$



b) $82 + 7 = \square$

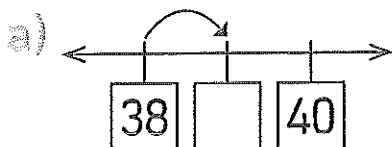


c) $73 + 5 = \square$

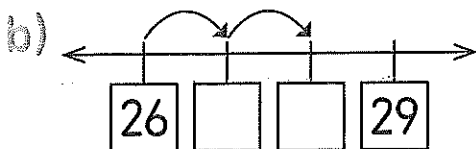
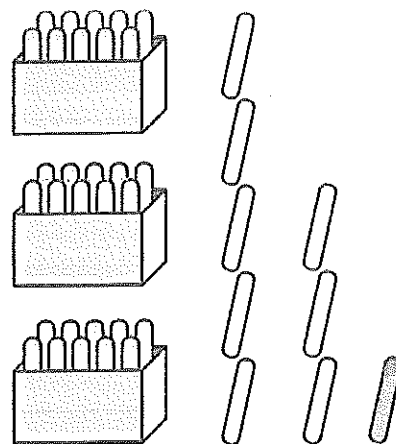


Séance 86 Additionnons des unités

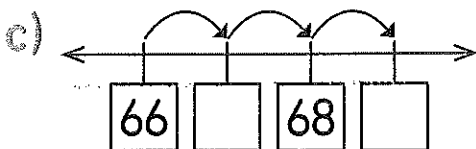
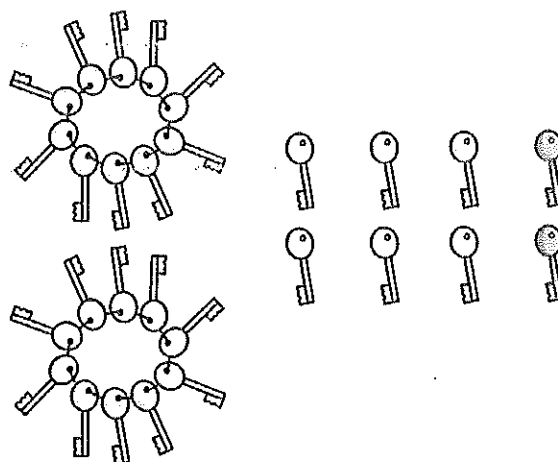
1  Complète puis additionne.



$38 + 1 = \square$



$26 + 2 = \square$

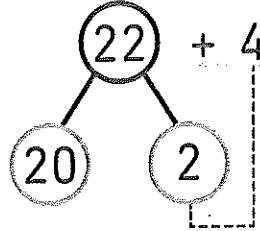
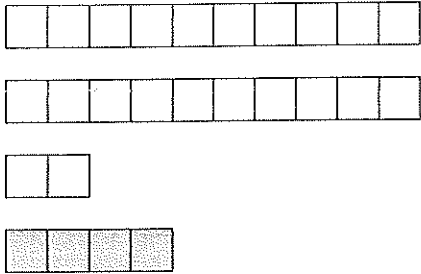


$66 + 3 = \square$

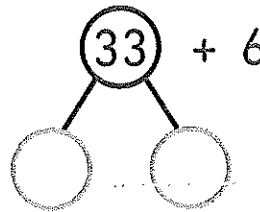
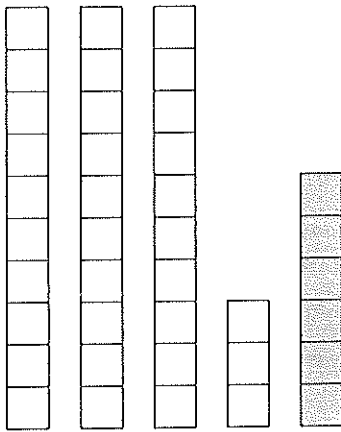
d) $58 + 2 = \square$

2 ✎ Additionne et complète.

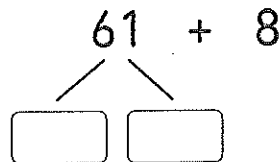
a) $22 + 4 = \square$



b) $33 + 6 = \square$



c) $61 + 8 = \square$



d) $54 + 4 = \square$

3 ✎ Soline a un petit train. Elle donne 3 wagons à Alex. Il lui reste 24 wagons. Combien en avait-elle au début ?

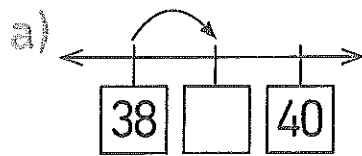
Soline avait wagons au début.

14. L'addition et la soustraction jusqu'à 100

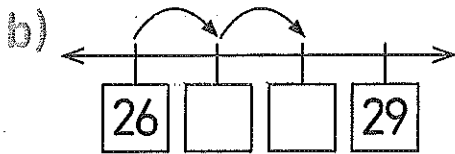
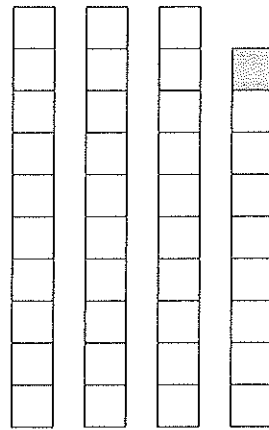
Activité 1

Session 109 • Addition des unités

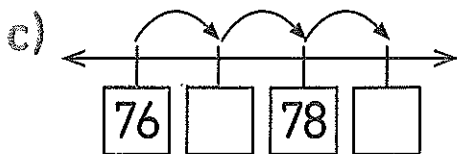
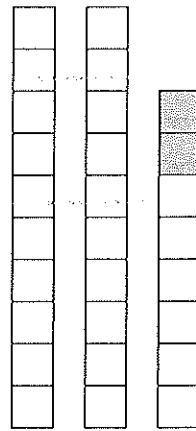
1 Complète puis additionne.



$38 + 1 = \square$



$26 + 2 = \square$

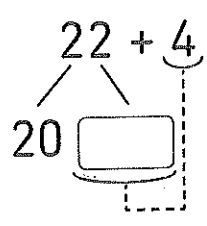
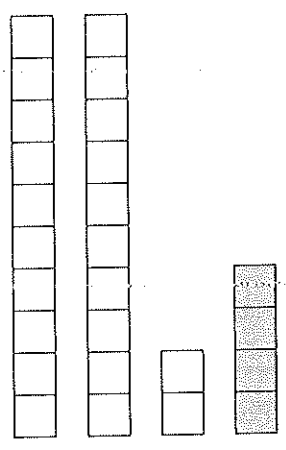


$76 + 3 = \square$

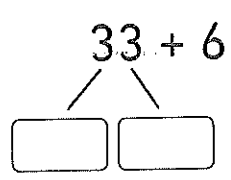

d) $88 + 2 = \square$

2 Additionne et complète.

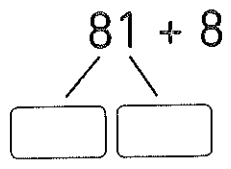
a) $22 + 4 = \square$



b) $33 + 6 = \square$



c) $81 + 8 = \square$



d) $54 + 4 = \square$