



**2** Écris les nombres manquants.

a)




$$2 \times 5 = 10$$




$$3 \times 5 = \square$$

b)




$$4 \times 5 = \square$$



$$5 \times 5 = \square$$

c)



$$10 \times 5 = \square$$

**3** Complète.

$$\star \times \star = 25$$

Que vaut  $\star$  ?