



2 Écris les nombres manquants.

a)




$2 \times 3 = 6$




$3 \times 3 = \square$

b)




$4 \times 3 = \square$




$5 \times 3 = \square$

c)




$6 \times 3 = \square$




$7 \times 3 = \square$

d)



$8 \times 3 = \square$



$9 \times 3 = \square$