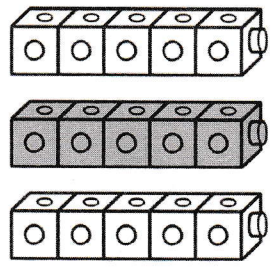


2 Combien de cubes y a-t-il en tout ?
Écris les nombres manquants.

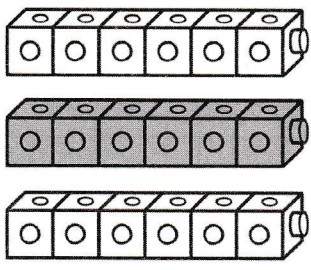
a)



3 groupes de font 15.

$$15 \div 3 = \text{}$$

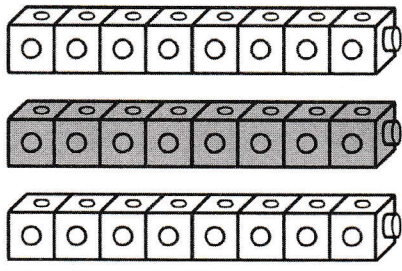
b)



3 groupes de font 18.

$$18 \div 3 = \text{}$$


c)



3 groupes de font 24.

$$24 \div 3 = \text{}$$

d)



3 groupes de font 30.

$$30 \div 3 = \text{}$$