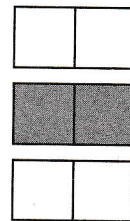


3 Écris les nombres manquants.

a)



$$3 \times \square = 6$$




$$6 \div 3 = \square$$

b)



$$3 \times \square = 12$$



$$12 \div 3 = \square$$

c)

$$3 \div 3 = \square$$


$$3 \times \square = 3$$



d)

$$21 \div 3 = \square$$

$$3 \times \square = 21$$



e)

$$27 \div 3 = \square$$

$$3 \times \square = 27$$

