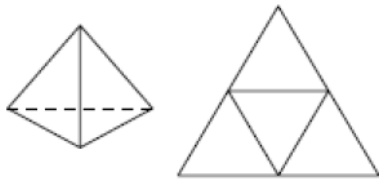


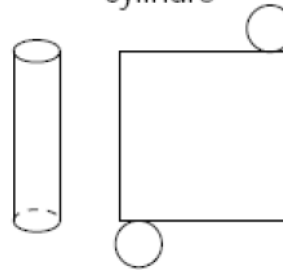
Les patrons correspondent-ils aux solides ? entoure la bonne réponse

tétraèdre régulier



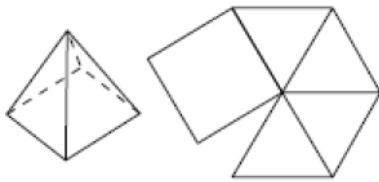
OUI
 NON

cylindre



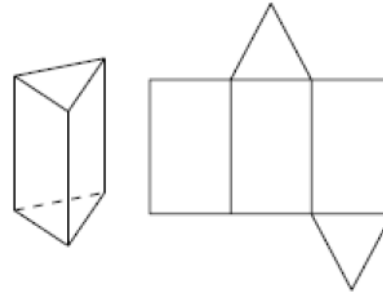
OUI
 NON

pyramide à base carrée



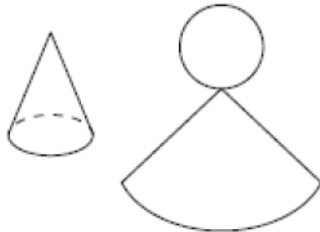
OUI
 NON

octaèdre irrégulier



OUI
 NON

cône



OUI
 NON

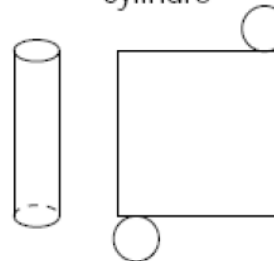
Les patrons correspondent-ils aux solides ? entoure la bonne réponse

tétraèdre régulier



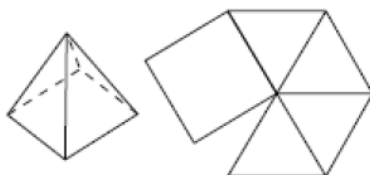
OUI
 NON

cylindre



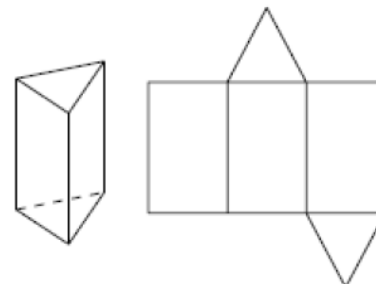
OUI
 NON

pyramide à base carrée




OUI
 NON

octaèdre irrégulier



OUI
 NON

cône



OUI
 NON