



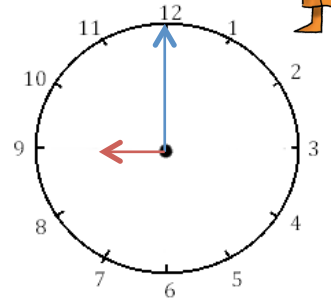
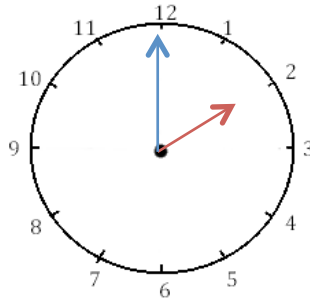
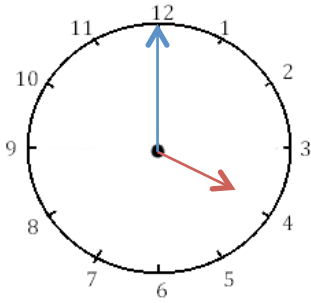
# Mesures

Fiche 1

## Les heures

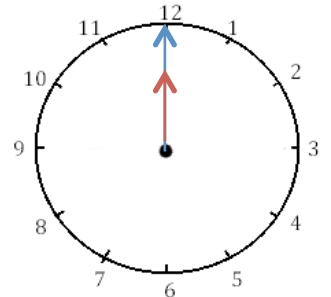
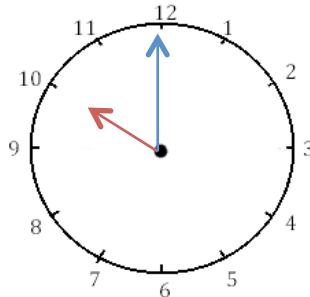
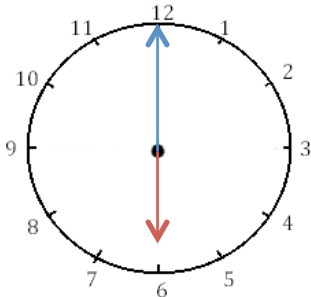


1 J'écris les heures indiquées sur ces horloges. Nous sommes le matin.




Il est \_\_\_ h et \_\_\_ min. Il est \_\_\_ h et \_\_\_ min. Il est \_\_\_\_\_.

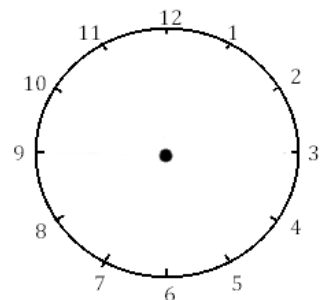
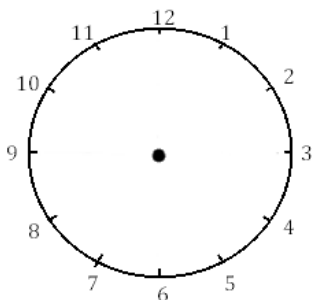
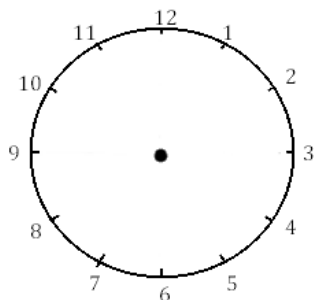
2 J'écris les heures indiquées sur ces horloges. Nous sommes le matin



Il est \_\_\_ h et \_\_\_ min. Il est \_\_\_ h et \_\_\_ min. Il est \_\_\_\_\_.



3 Je place les aiguilles selon les heures indiquées. (heures en rouge, minutes en bleu)



Il est 3 h 00 min. Il est 11 h 00 min. Il est 5 h 00 min.

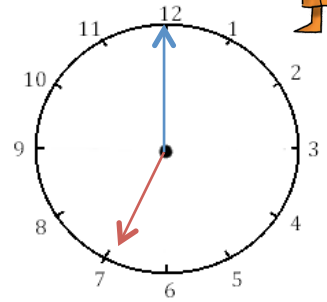
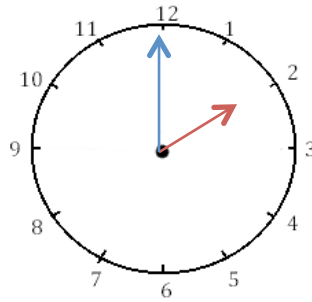
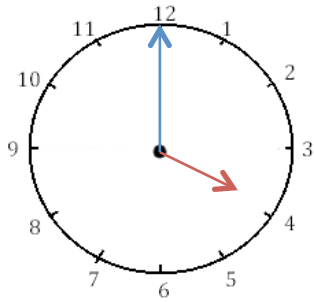


# Mesures

Fiche 2

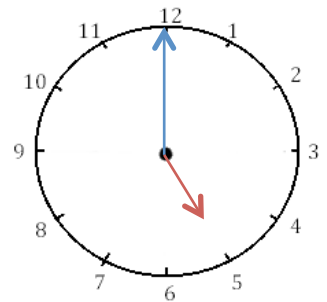
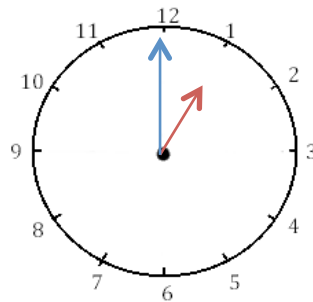
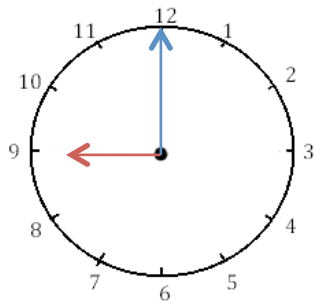
## Les heures

1 J'écris les heures indiquées sur ces horloges. Nous sommes l'après-midi.




Il est \_\_\_ h et \_\_\_ min. Il est \_\_\_ h et \_\_\_ min. Il est \_\_\_\_\_.

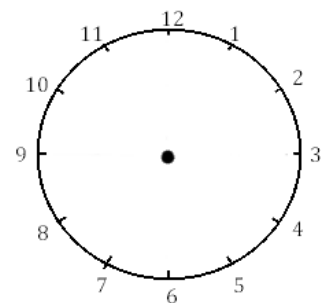
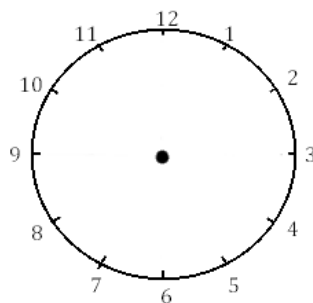
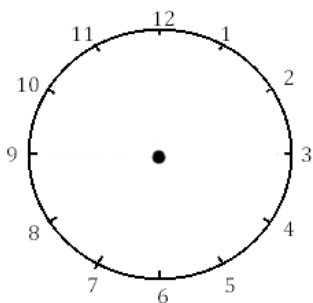
2 J'écris les heures indiquées sur ces horloges. Nous sommes l'après-midi.



Il est \_\_\_ h et \_\_\_ min. Il est \_\_\_ h et \_\_\_ min. Il est \_\_\_\_\_.



3 Je place les aiguilles selon les heures indiquées. (heures en rouge, minutes en bleu)



Il est 13 h 00 min. Il est 20 h 00 min. Il est 23 h 00

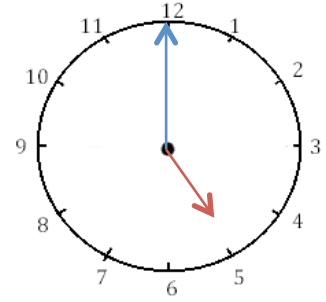
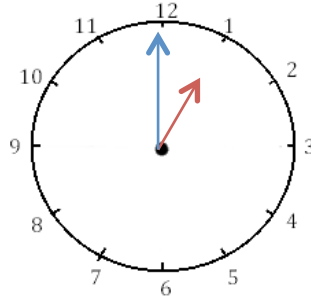
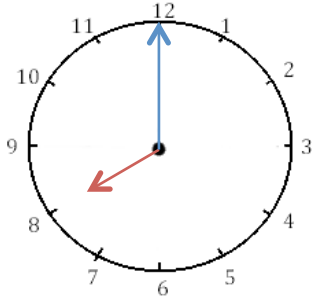


# Mesures

Fiche 3

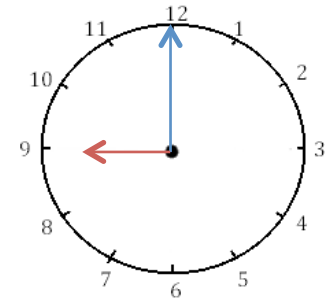
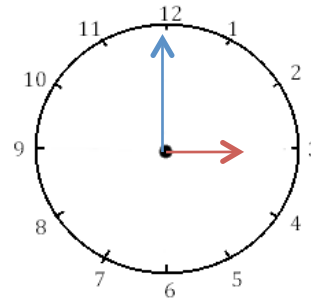
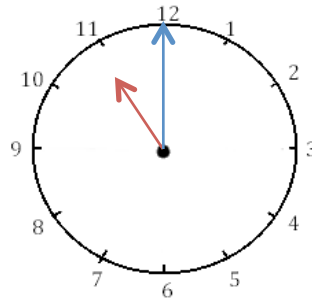
## Les heures

1 J'écris les heures indiquées sur ces horloges. Nous sommes l'après-midi.



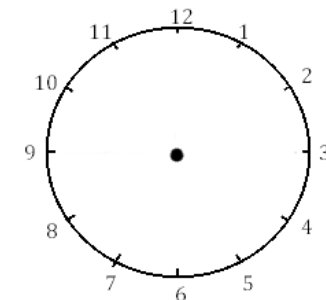
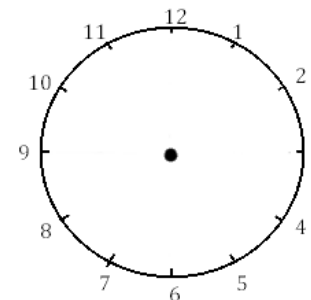
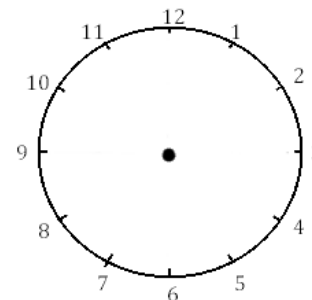
Il est \_\_\_ h et \_\_\_ min. Il est \_\_\_ h et \_\_\_ min. Il est \_\_\_ h et \_\_\_ min.

2 J'écris les heures indiquées sur ces horloges. Nous sommes le matin.



Il est \_\_\_ h et \_\_\_ min. Il est \_\_\_ h et \_\_\_ min. Il est \_\_\_ h et \_\_\_ min.


3 Je place les aiguilles selon les heures indiquées. (heures en rouge, minutes en bleu)



Il est 23 h 00 min.

Il est 14 h 00 min.

Il est 18 h 00



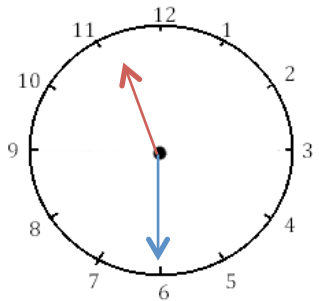
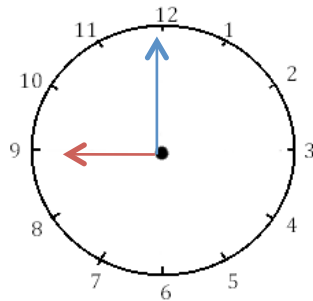
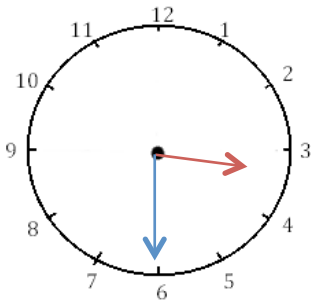


# Mesures

Fiche 4

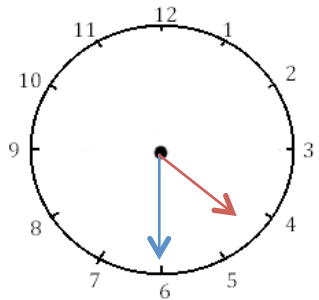
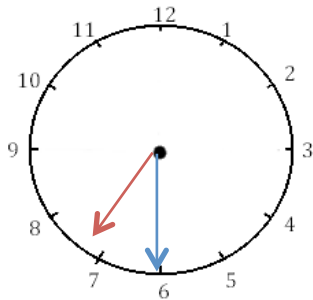
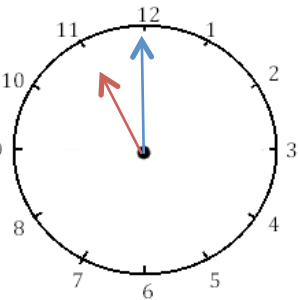
## Les heures

1 J'écris les heures indiquées sur ces horloges. Nous sommes le matin.



Il est \_\_\_ h et \_\_\_ min. Il est \_\_\_ h et \_\_\_ min. Il est \_\_\_ h et \_\_\_ min.

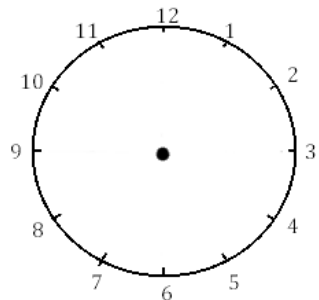
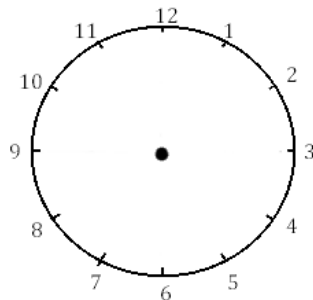
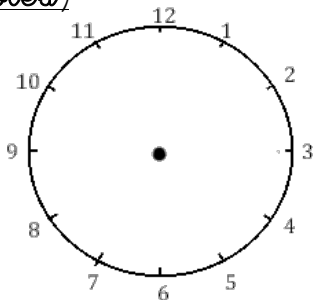
2 J'écris les heures indiquées sur ces horloges. Nous sommes l'après-midi.



Il est \_\_\_ h et \_\_\_ min. Il est \_\_\_ h et \_\_\_ min. Il est \_\_\_ h et \_\_\_ min.

3 Je place les aiguilles selon les heures indiquées. (heures en rouge, minutes

bleu)



Il est 12 h 30 min.

Il est 9 h 00 min.

Il est 15 h 30 min.

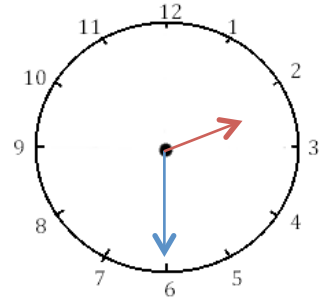
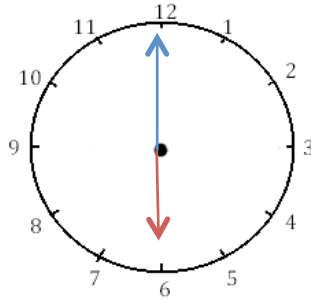
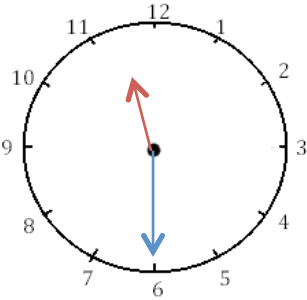


# Mesures

Fiche 5

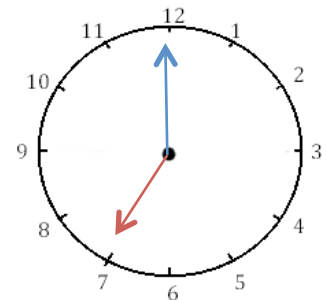
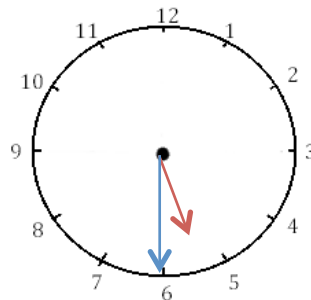
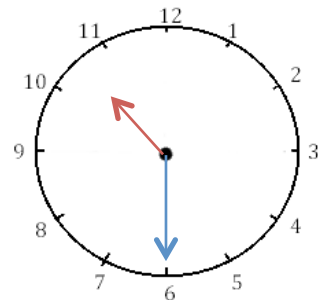
## Les heures

1 J'écris les heures indiquées sur ces horloges. Nous sommes l'après-midi.




Il est \_\_\_ h et \_\_\_ min. Il est \_\_\_ h et \_\_\_ min. Il est \_\_\_ h et \_\_\_ min.

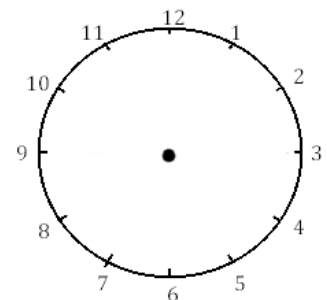
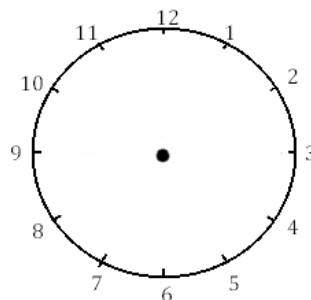
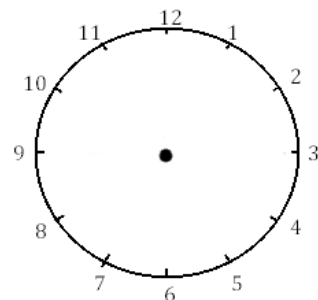
2 J'écris les heures indiquées sur ces horloges. Nous sommes le matin.



Il est \_\_\_ h et \_\_\_ min. Il est \_\_\_ h et \_\_\_ min. Il est \_\_\_ h et \_\_\_ min.




3 Je place les aiguilles selon les heures indiquées. (heures en rouge, minutes en bleu)



Il est 21 h 30 min.

Il est 13 h 00 min.

Il est 18 h 30 min.

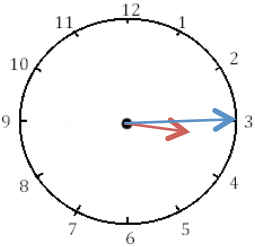




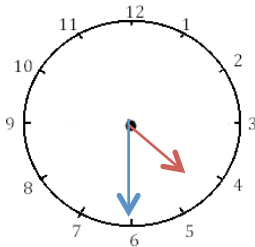
# Mesures

## Les heures

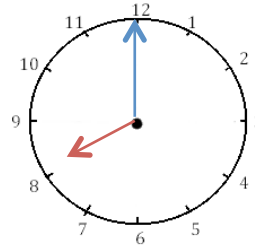
1 J'écris les heures indiquées sur ces horloges. Nous sommes le matin.



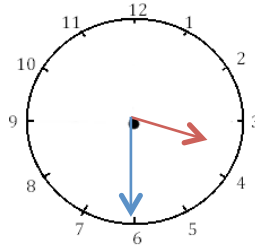
Il est \_\_\_\_\_



Il est \_\_\_\_\_

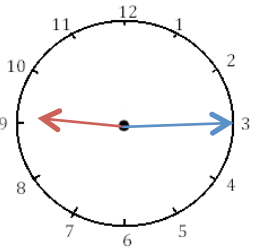


Il est \_\_\_\_\_

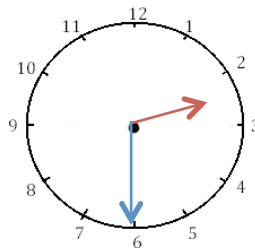


Il est \_\_\_\_\_

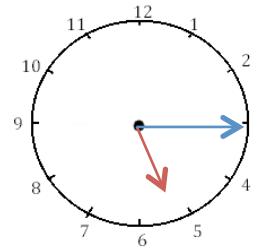
2 J'écris les heures indiquées sur ces horloges. Nous sommes l'après-midi.



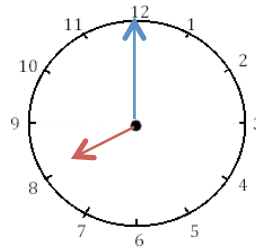
Il est \_\_\_\_\_



Il est \_\_\_\_\_



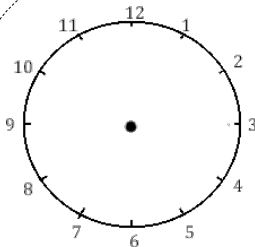
Il est \_\_\_\_\_



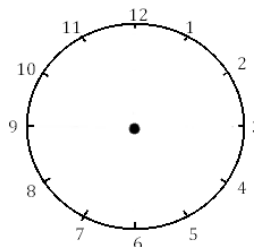
Il est \_\_\_\_\_



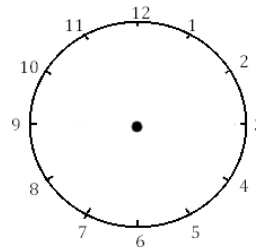
3 Je place les aiguilles selon les heures indiquées. (heures en rouge, minutes en bleu)



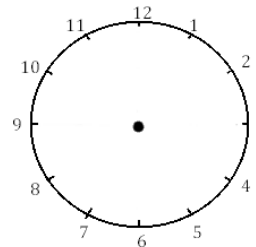
Il est 2 h 00 min.



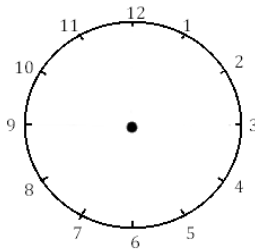
Il est 12 h 30 min.



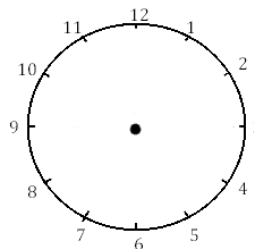
Il est 5 h 15 min.



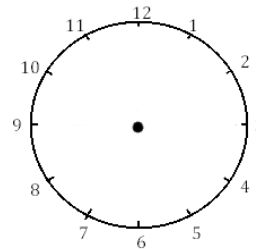
Il est 6 h et demie.



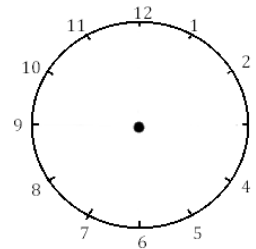
Il est 3 h et quart.



Il est 11 h 00 min.



Il est 1 h 30 min.



Il est 21 h 15 min.






# Mesures

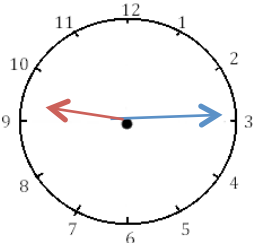
Fiche 7

## Les heures



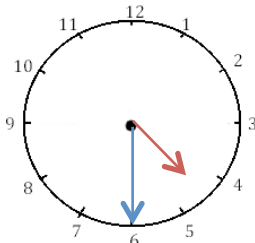
1

J'écris les heures du matin et de l'après-midi.



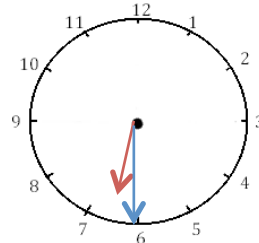
Il est \_\_\_ h \_\_\_ min.

Il est \_\_\_ h \_\_\_ min.



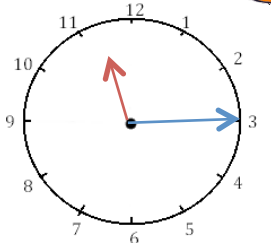
Il est \_\_\_ h \_\_\_ min.

Il est \_\_\_ h \_\_\_ min.



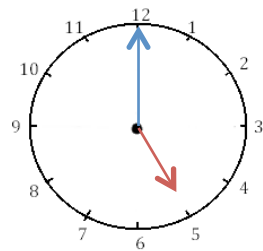
Il est \_\_\_ h \_\_\_ min.

Il est \_\_\_ h \_\_\_ min.



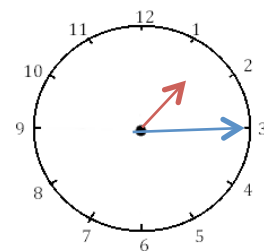
Il est \_\_\_ h \_\_\_ min.

Il est \_\_\_ h \_\_\_ min.



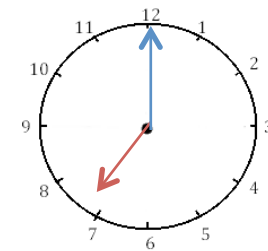
Il est \_\_\_ h \_\_\_ min.

Il est \_\_\_ h \_\_\_ min.



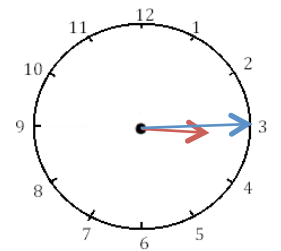
Il est \_\_\_ h \_\_\_ min.

Il est \_\_\_ h \_\_\_ min.




Il est \_\_\_ h \_\_\_ min.

Il est \_\_\_ h \_\_\_ min.



Il est \_\_\_ h \_\_\_ min.

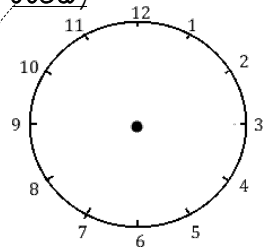
Il est \_\_\_ h \_\_\_ min.



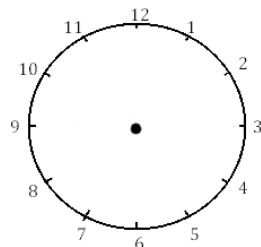
2

Je place les aiguilles selon les heures indiquées. (heures en rouge, minutes en

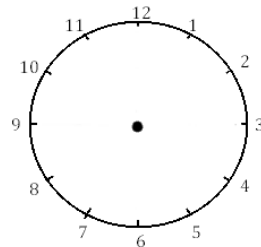
bleu)



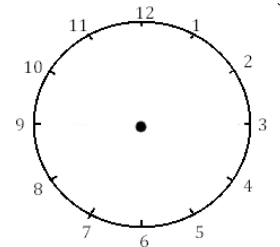
Il est midi.



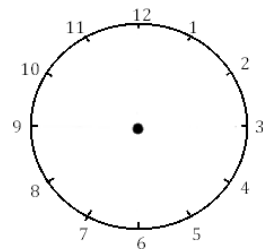
Il est 1 h et quart.



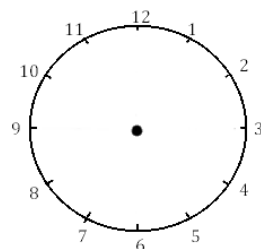
Il est 22 heures.



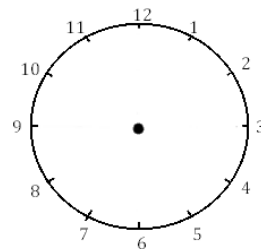
Il est 8 h et demie.



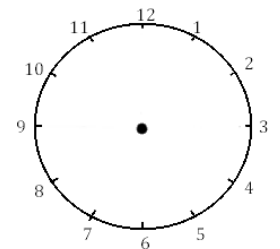
Il est 16 h et quart.



Il est 11 h et demie.



Il est minuit.



Il est 9 h et quart.



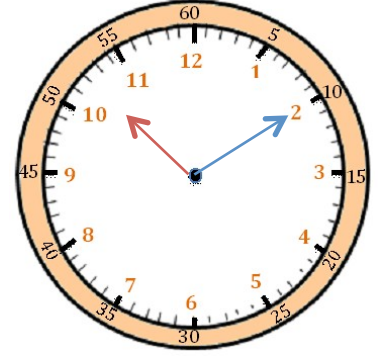
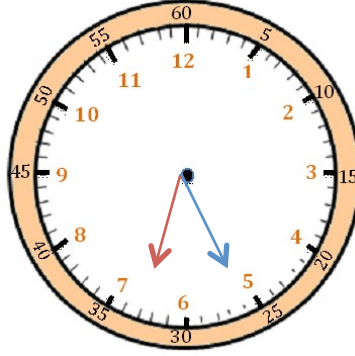
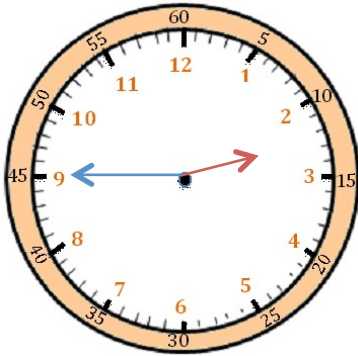
# Mesures

Fiche 8

## Les heures

1

J'écris les heures indiquées sur ces horloges. Nous sommes le matin.



Il est \_\_\_ h et \_\_\_ min.

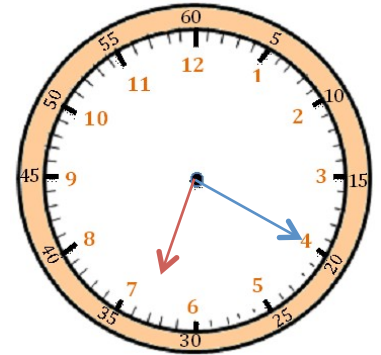
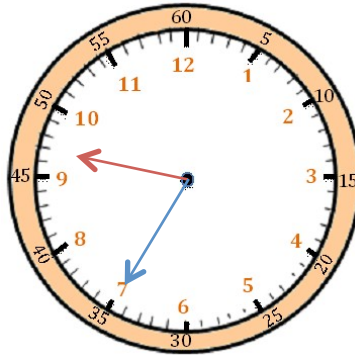
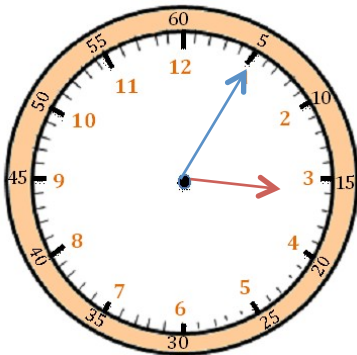
Il est \_\_\_ h et \_\_\_ min.

Il est \_\_\_ h et \_\_\_ min.



2

J'écris les heures indiquées sur ces horloges. Nous sommes l'après-midi.



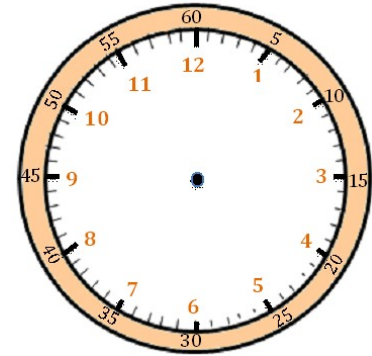
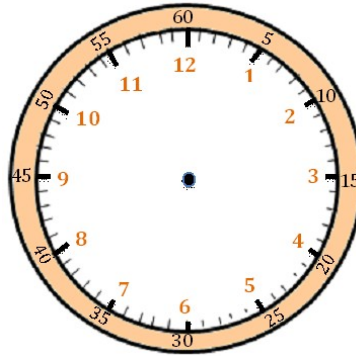
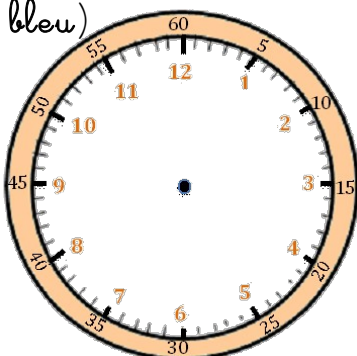
Il est \_\_\_ h et \_\_\_ min.

Il est \_\_\_ h et \_\_\_ min.

Il est \_\_\_ h et \_\_\_ min.

3

Je place les aiguilles selon les heures indiquées. (heures en rouge, minutes en bleu)



Il est 2 h 05 min.

Il est 8 h 20 min.

Il est 11 h 10 min.





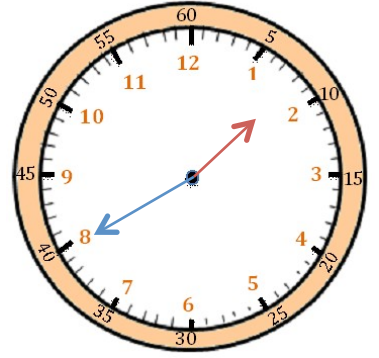
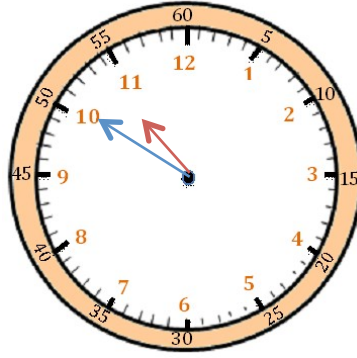
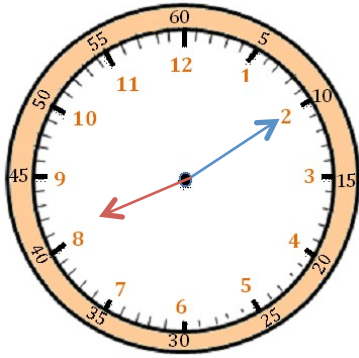
# Mesures

Fiche 9

## Les heures

1

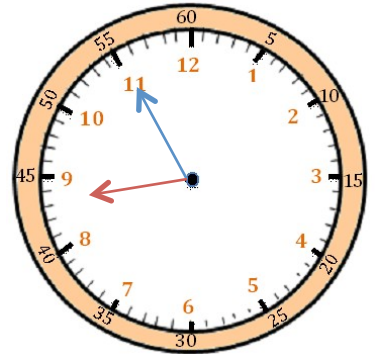
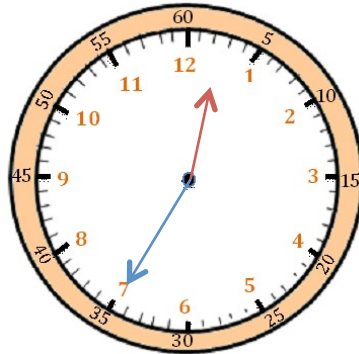
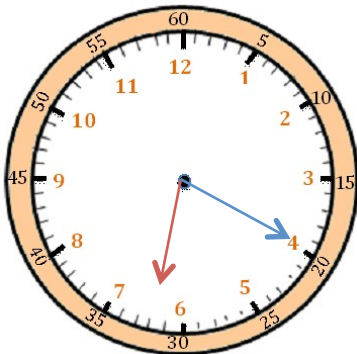
J'écris les heures indiquées sur ces horloges. Nous sommes l'après-midi.



Il est \_\_\_ h et \_\_\_ min. Il est \_\_\_ h et \_\_\_ min. Il est \_\_\_ h et \_\_\_ min.

2

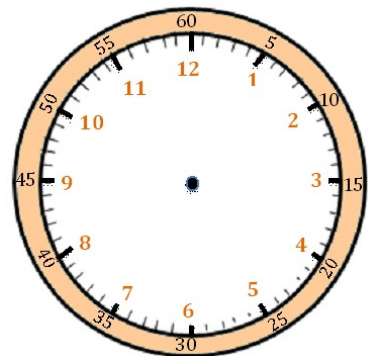
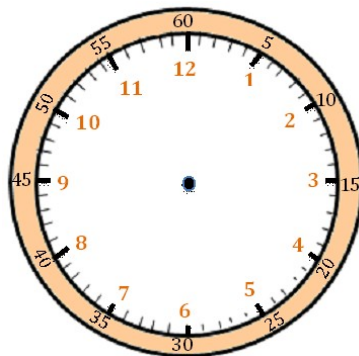
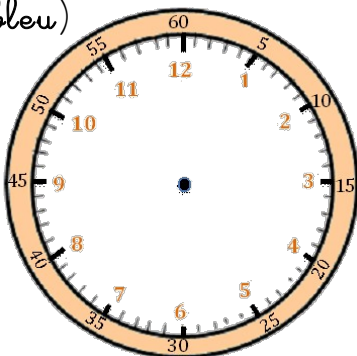
J'écris les heures indiquées sur ces horloges. Nous sommes le matin.



Il est \_\_\_ h et \_\_\_ min. Il est \_\_\_ h et \_\_\_ min. Il est \_\_\_ h et \_\_\_ min.

3

Je place les aiguilles selon les heures indiquées. (heures en rouge, minutes en bleu)



Il est 18 h 45 min.

Il est 14 h 25 min.

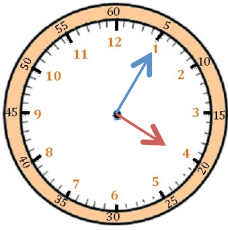
Il est 21 h 50 min.



# Mesures

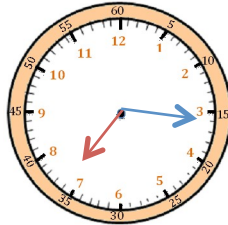
## Les heures

1 J'écris les heures du matin et de l'après-midi.



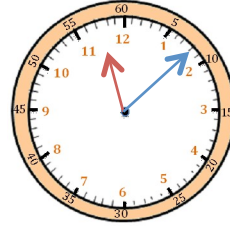
Il est \_\_ h \_\_ min.

Il est \_\_ h \_\_ min.



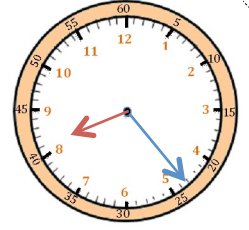
Il est \_\_ h \_\_ min.

Il est \_\_ h \_\_ min.



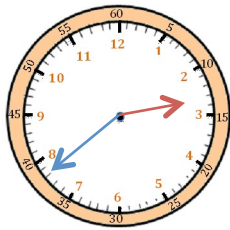
Il est \_\_ h \_\_ min.

Il est \_\_ h \_\_ min.



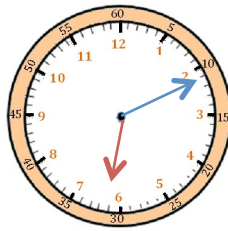
Il est \_\_ h \_\_ min.

Il est \_\_ h \_\_ min.



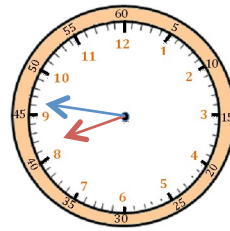
Il est \_\_ h \_\_ min.

Il est \_\_ h \_\_ min.



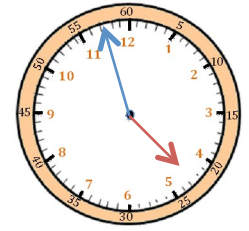
Il est \_\_ h \_\_ min.

Il est \_\_ h \_\_ min.



Il est \_\_ h \_\_ min.

Il est \_\_ h \_\_ min.

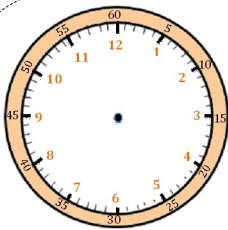


Il est \_\_ h \_\_ min.

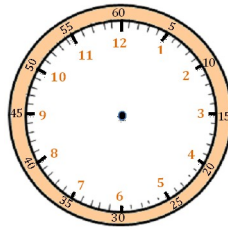
Il est \_\_ h \_\_ min.



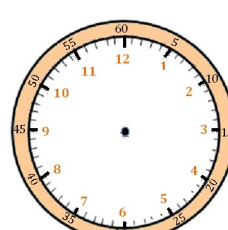
2 Je place les aiguilles selon les heures indiquées. (heures en rouge, minutes en bleu)



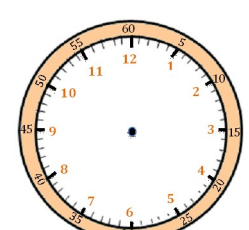
Il est 21 h 14 min.



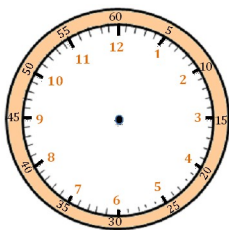
Il est 9 h 38 min.



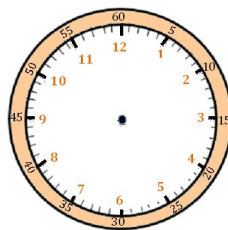
Il est 14 h 22 min.



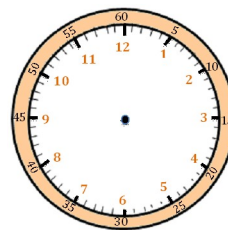
Il est 15 h 03 min.



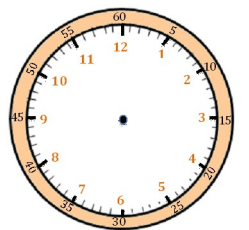
Il est 16 h 55 min.



Il est 23 h 35 min.



Il est minuit 20 min.



Il est 7 h 45 min.

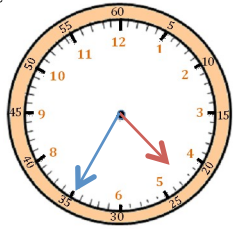


# Mesures

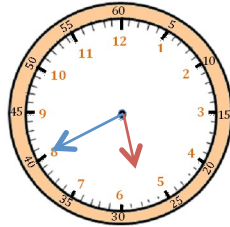
Fiche 11

## Les heures

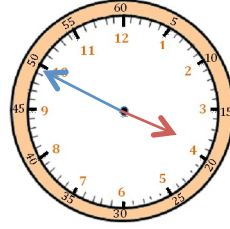
1 J'écris les heures de ces horloges de deux manières différentes. Je regarde bien l'exemple.



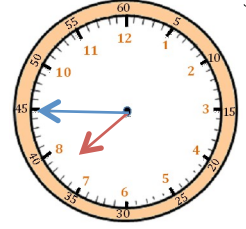
Il est 4 h 35 min  
ou 5 h moins



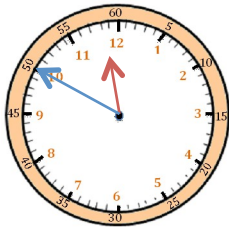
Il est \_\_\_ h \_\_\_ min  
ou \_\_\_\_\_



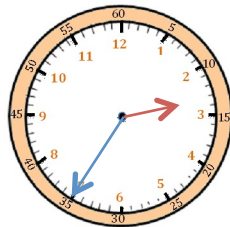
Il est \_\_\_ h \_\_\_ min  
ou \_\_\_\_\_



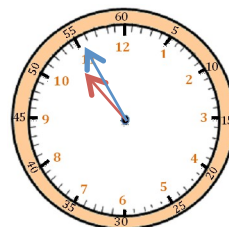
Il est \_\_\_ h \_\_\_ min  
ou \_\_\_\_\_



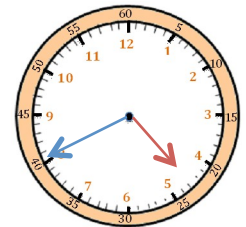
Il est \_\_\_ h \_\_\_ min  
ou \_\_\_\_\_



Il est \_\_\_ h \_\_\_ min  
ou \_\_\_\_\_



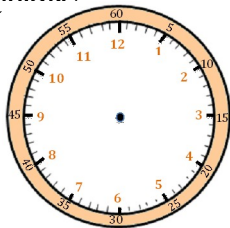
Il est \_\_\_ h \_\_\_ min  
ou \_\_\_\_\_



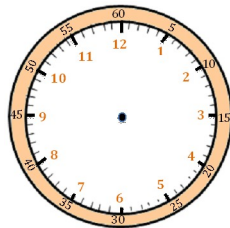
Il est \_\_\_ h \_\_\_ min  
ou \_\_\_\_\_



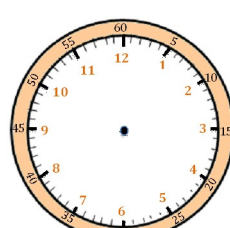
2 Je place les aiguilles selon les heures indiquées. (heures en rouge, minutes en bleu.)



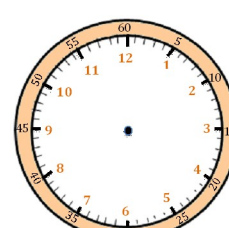
Il est 12 h 40 min.



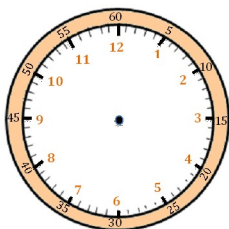
Il est 9 h moins vingt-cinq.



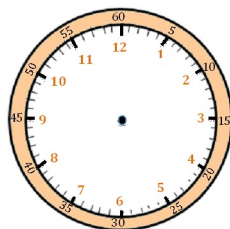
Il est 15 h 55 min.



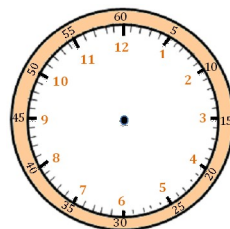
Il est 1 h moins le quart.



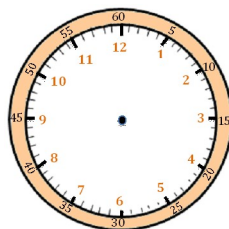
Il est 6 h moins dix.



Il est 21 h 35 min.



Il est midi moins cinq.



Il est 17 h 40 min.